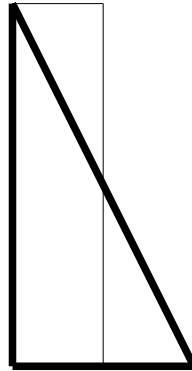
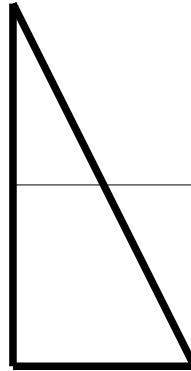


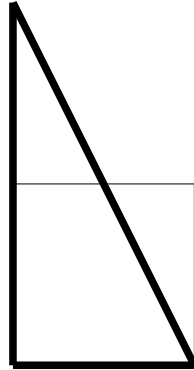
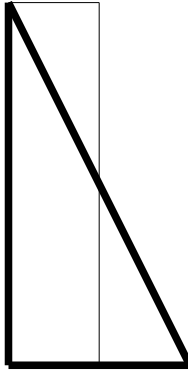
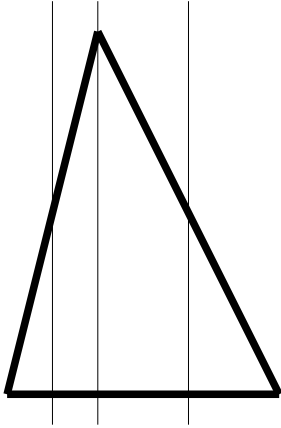
$$A = \frac{bh}{2}$$

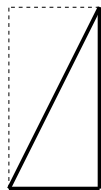


$$A = \frac{b}{2}h$$

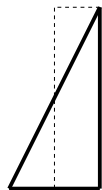


$$A = b\frac{h}{2}$$

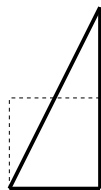




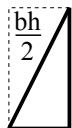
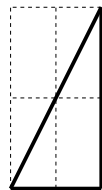
$$A = \frac{bh}{2}$$



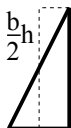
$$A = \frac{b}{2}h$$



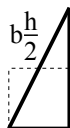
$$A = b\frac{h}{2}$$



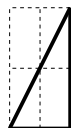
$$A = \frac{bh}{2}$$



$$A = \frac{b}{2}h$$



$$A = b\frac{h}{2}$$



$$A = \frac{b}{2}\frac{h}{2}$$